





One way of understanding division is to think of it as equal grouping.



8 divided by 2 can be thought of as:
'How many lots of 2 make 8'.


Pictures or objects can help. Look at these 8 dinosaurs and group them in 2s.

I have ringed each group of two dinosaurs.



There are 4 groups of 2 dinosaurs, so 8 divided by 2 is 4.


1. How many lots of 4 make 16?



2. How many lots of 2 make 12?




3. How many lots of 5 make 20?




4. How many lots of 3 make 9?



5. How many lots of 10 make 30?




1. How many lots of 4 make 12?



2. How many lots of 2 make 18?




3. How many lots of 5 make 25?




4. How many lots of 3 make 12?



5. How many lots of 10 make 40?




1. How many lots of 4 make 20?




2. How many lots of 2 make 16?




3. How many lots of 5 make 15?




4. How many lots of 3 make 21?



5. How many lots of 10 make 50?




1. How many lots of 4 make 24?




2. How many lots of 2 make 10?




3. How many lots of 5 make 30?



4. How many lots of 3 make 18?



5. How many lots of 10 make 20?





Answers

Page 2

1. 4 2. 6 3. 4 4. 3 5. 3

Page 3

1. 3 2. 9 3. 5 4. 4 5. 4

Page 4

1. 5 2. 8 3. 3 4. 7 5. 5

Page 5

1. 6 2. 5 3. 6 4. 6 5. 2